

1. 다음 수를 보기와 같이 나타낸 것을 고르시오.

보기

$$83679 = 80000 + 3000 + 600 + 70 + 9$$

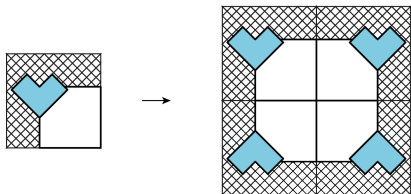
$$\Rightarrow 54318 = \boxed{}$$

- ① $50000 + 4000 + 300 + 10 + 8$
② $50000 + 4000 + 400 + 10 + 8$
③ $500000 + 40000 + 300 + 10 + 8$
④ $500000 + 40000 + 3000 + 10 + 8$
⑤ $500000 + 40000 + 3000 + 100 + 8$

해설

$$54318 = 50000 + 4000 + 300 + 10 + 8$$

2. 왼쪽 모양을 움직여서 오른쪽 무늬를 만들 수 있는 방법을 모두 고르시오.



① 밀기

② 뒤집기

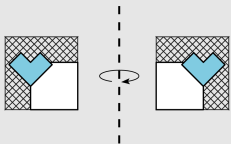
③ 돌리기

④ 뒤틀기

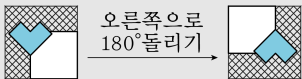
⑤ 겹치기

해설

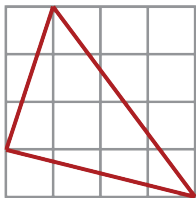
* 뒤집기



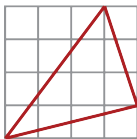
* 돌리기



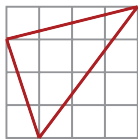
3. 도형을 오른쪽으로 밀고 왼쪽으로 5번 뒤집은 다음 시계 방향으로 180°만큼 돌렸을 때의 도형은 어느 것입니까?



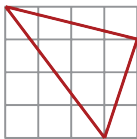
①



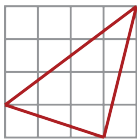
②



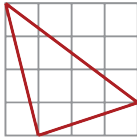
③



④



⑤



해설

4. 다음 중 나눗셈의 몫이 20에 가장 가까운 것은 어느 것인지 구하십시오.

① $198 \div 35$

② $638 \div 75$

③ $466 \div 58$

④ $361 \div 37$

⑤ $428 \div 24$

해설

① $198 \div 35 = 5 \cdots 23$

② $638 \div 75 = 8 \cdots 38$

③ $466 \div 58 = 8 \cdots 2$

④ $361 \div 37 = 9 \cdots 28$

⑤ $428 \div 24 = 17 \cdots 20$